



Revision Worksheet for the Month of May
Subject: Mathematics

Grade: II__

Name: _____ Date: __/__/__

1. Write number names for the following.

a. 235 _____

b. 938 _____

2. Write Numbers for the following

a. One hundred fifty _____

b. Three hundred fifty _____

3. Arrange the numbers in Ascending order and Descending order.

456	786	934	120	439
-----	-----	-----	-----	-----

Ascending order

--	--	--	--	--

Descending order

--	--	--	--	--

4. Five children participated in a game of Cone collection. They collected cones as Achu (90), Sachu (26), Kamal (79), Hari (85) and Santhosh(88).

a. Who got the first prize in cone collection. _____

b. Who got the Third prize in cone collection. _____

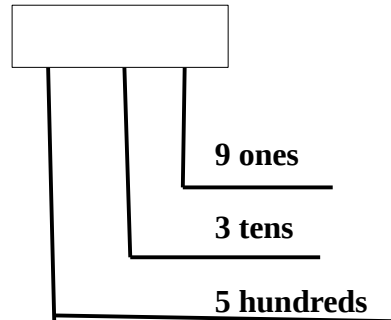
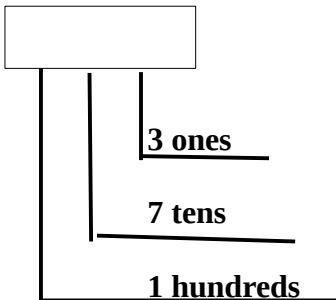
c. Who got the minimum number of cones? _____ and How many? _____.

5. Expand the numbers

a. 567=

b. 239=

6. Form the numbers with the given help.



7. Using the number strip find the sum



1

a. 4+5=___ b. 2+8=___ c. 3+6=___ d. 1+8=___

8. Sumith has 3 black shirts and 9 red shirts. Find the total number of shirts Sumith has ?

Number of Black shirts= ___

Number of Red Shirts= _____

Total number of shirts= Number of black shirts+ Number of red shirts= ___+___= _____

9. Find the sum of the following.

H	T	O
	6	4
	1	0
+	2	5

	H	T	O
		9	8
	+	2	3


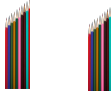

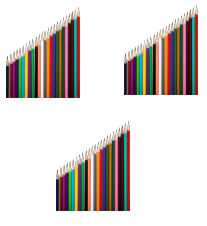




	H	T	O
	4	3	6
	3	2	2
+	1	3	1

10. Expand the following.

a. 560= ___ Hundreds+ ___ Tens+ ___ Ones.

b. 408= ___ Hundreds+ ___ Tens+ ___ Ones.

11. Write the number of pencils from the following.

	Hundreds	Tens	Ones	Number of Pencils
Abhu				
Bins				
Shirmila				

a. Who has the maximum number of pencils? _____ and How many? _____.

b. Who got the minimum number of pencils? _____ and How many? _____.

Arrange the number of pencils in descending order.

--	--	--

12. Circle the even numbers and cross the odd numbers.

456	250	453	675	278	16	139	458	222	111
-----	-----	-----	-----	-----	----	-----	-----	-----	-----

PA1 portions: Chapter-2 Numbers Upto 1000,
Chapter-3 Addition. Learn from Notebook, Worksheet, Workbook.